

Chapter 6 - Statistics

Statistical distributions

Chapter Overview

1. General probability distributions
2. Binomial distribution
3. Cumulative binomial probabilities

4	4.1	<p>Understand and use simple, discrete probability distributions (calculation of mean and variance of discrete random variables is excluded), including the binomial distribution, as a model; calculate probabilities using the binomial distribution.</p>	<p>Students will be expected to use distributions to model a real-world situation and to comment critically on the appropriateness.</p> <p>Students should know and be able to identify the discrete uniform distribution.</p> <p>The notation $X \sim B(n, p)$ may be used.</p> <p>Use of a calculator to find individual or cumulative binomial probabilities.</p>
----------	-----	--	---

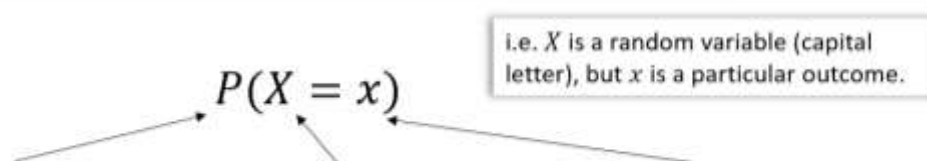
Probability Distributions

You are already familiar with the concept of **variable** in statistics: a collection of values (e.g. favourite colour of students in the room):

x	red	green	blue	orange
$P(X = x)$	0.3	0.4	0.1	0.2

If each is assigned a probability of occurring, it becomes a **random variable**.

✍ A random variable X represents a single experiment/trial. It consists of outcomes with a probability for each.



A shorthand for $P(X = x)$ is ✍ $p(x)$ (note the lowercase p).

It's like saying "the probability that the outcome of my coin throw was heads" ($P(X = heads)$) vs "the probability of heads" ($p(heads)$). In the latter the coin throw was implicit, so we can skip the ' $X =$ '.

Probability Distributions vs Probability Functions

There are two ways to write the mapping from outcomes to probabilities:

1. As a function

$$p(x) = \begin{cases} 0.1x, & x = 1,2,3,4 \\ 0, & \textit{otherwise} \end{cases}$$

2. As a table

x	1	2	3	4
$p(x)$				

Example

The random variable X represents the **number of heads when three coins are tossed**.

Sample Space

Distribution as a table

x				
$p(X = x)$				

Distribution as a function

Example

1. A discrete random variable X has the probability function

$$P(X=x) = \begin{cases} k(1-x)^2 & x = -1, 0, 1 \text{ and } 2 \\ 0 & \text{otherwise.} \end{cases}$$

- (a) Show that $k = \frac{1}{6}$.

(3)

x				
$p(X = x)$				

Remember:

Probability of a Range

We may need to consider the probability of a range of solutions.

Example: Find the given probabilities for this probability distribution

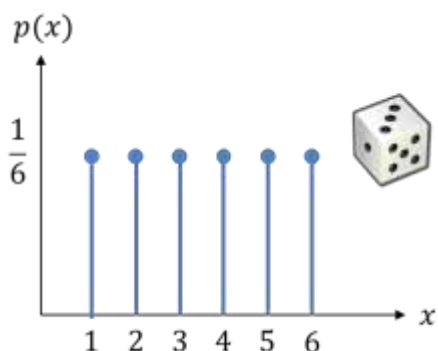
x	2	3	4	5
$p(x)$	0.1	0.3	0.2	0.4

a) $P(X > 3)$

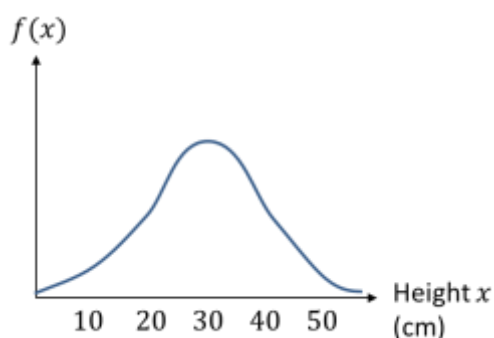
b) $P(2 \leq X < 4)$

c) $P(2X + 1 \geq 6)$

We can also represent a probability distribution graphically:



- The throw of a die is an example of a **discrete uniform distribution** because the probability of each outcome is the same.
- $p(x)$ for discrete random variables is known as a **probability mass function**, because the probability of each outcome represents an actual 'amount' (i.e. mass) of probability.



- We can also have probability distributions for **continuous** variables, e.g. height
- However, the probability that something has a height of say **exactly** 30cm, is infinitely small (effectively 0).

$p(x)$ (written $f(x)$) for continuous random variables is known as a **probability density function**. $p(30)$ wouldn't give us the probability of being 30cm tall, but the amount of probability **per unit height**, i.e. the density. This is similar to histograms where frequency density is the "frequency per unit value". Just as an area in a histogram would then give a frequency, and area under a probability density graph would give a probability (mass).

You will encounter the **Normal Distribution** in Year 2, which is an example of a continuous probability distribution.

Textbook Exercise 6A Pg 86

Leftie Example

Let's simplify the problem by using just 3 people:

The probability a randomly chosen person is left-handed is 0.1. If there is a group of 3 people, what is the probability that:

- a) All 3 are left-handed.
- b) 0 are left-handed.
- c) 1 person is left-handed.
- d) 2 people are left-handed.

d

a

b

c

Let's try to generalise!

If there were x 'lefties' out of 3, then we can see, using the examples, that the probability of a single matching outcome is $0.1^x \times 0.9^{3-x}$. How many rows did we have each time? In a sequence of three L's and R's, there are "3 choose x ", i.e. $\binom{3}{x}$ ways of choosing x of the 3 letters to be L's. Therefore the probability of x out of 3 people being left handed is:

$$\binom{3}{x} 0.1^x 0.9^{3-x}$$

The Binomial Distribution

✓ You can model a random variable X with a binomial distribution $B(n, p)$ if

- there are a fixed number of trials, n ,
- there are two possible outcomes: 'success' and 'failure',
- there is a fixed probability of success, p
- the trials are independent of each other

← In our example, 'success' was 'leftie'.

If $X \sim B(n, p)$ then:

$$P(X = r) = \binom{n}{r} p^r (1 - p)^{n-r}$$

← r is the number of successes out of n .

← " \sim " means "has the distribution"

On a table of 8 people, 6 people are left handed.

- Suggest a suitable model for a random variable X : the number of left-handed people in a group of 8, where the probability of being left-handed is 0.1.
- Find the probability 6 people are left handed.
- Suggest why the chosen model may not have been appropriate.

a

b

c

In general, choosing a well-known model, such as a Binomial distribution, makes certain **simplifying assumptions**. Such assumptions simplifies the maths involved, but potentially at the expense of not adequately modelling the situation.



The random variable $X \sim B\left(12, \frac{1}{6}\right)$. Find:

- $P(X = 2)$
- $P(X = 9)$
- $P(X \leq 1)$

A company claims that a quarter of the bolts sent to them are faulty. To test this claim the number of faulty bolts in a random sample of 50 is recorded.

(a) Give two reasons why a binomial distribution may be a suitable model for the number of faulty bolts in the sample. (2)

Test Your Understanding

1 $X \sim B(6, 0.2)$
What is $P(X = 2)$?

What is $P(X \geq 5)$?

2 I have a bag of 2 red and 8 white balls. X represents the number of red balls I chose after 5 selections (with replacement).

How is X distributed?

Determine the probability that I chose 3 red balls.

An awkward Tiffin boy ventures into Tiffin Girls. He asks 20 girls out on the date. The probability that each girl says yes is 0.3.

Determine the probability that he will end up with:

- a) Less than 6 girls on his next date.
- b) At least 9 girls on his next date.



The boy considers the evening a success if he dated at least 9 girls that evening. He repeats this process across 5 evenings.

- c) Calculate the probability that he had at least 4 successful evenings.

(Note: You won't be able to use your table for (c) as p is not a nice round number – calculate prob directly)

Cumulative Probabilities

Often we wish to find the probability of a range of values.
For a Binomial distribution, this was relatively easy if the range was narrow, e.g. $P(X \leq 1) = P(X = 0) + P(X = 1)$, but would be much more computationally expensive if we wanted say $P(X \leq 6)$.

If $X \sim B(10, 0.3)$, find $P(X \leq 6)$.

How to calculate on your ClassWiz:

Press Menu then 'Distributions'.
Choose "Binomial CD" (the C stands for 'Cumulative').
Choose 'Variable'.
 $x = 6$
 $N = 10$
 $p = 0.3$
Pressing = gives the desired value.

Using tables (e.g. Page 204 of textbook)

Look up $n = 10$ and the column $p = 0.3$.
Then look up the row $x = 6$.
The value should be 0.9894.

Important Note: The tables only have limited values of p . You may have to use your calculator. You will need to use your calculator in the exam anyway.



Cumulative Probabilities

The random variable $X \sim B(20, 0.4)$. Find:

$$P(X \leq 7) =$$

$$P(X < 6) =$$

$$P(X \geq 15) =$$

Given that $X \sim B(25, 0.25)$

$$P(X = 6) =$$

$$P(X > 20) =$$

$$P(6 < X \leq 10) =$$

Look up $n = 20, p = 0.4, x = 7$

Note that the table requires \leq

To get this right, just say in your head "What's the opposite of 'at least 15'?" Hopefully you can see it's 'at most 14'.

X can be 7 to 10. So we want up to 10, with everything up to 6 excluded.

Quickfire Questions

Write the following in terms of cumulative probabilities, e.g. $P(X < 7) = P(X \leq 6)$

$$P(X < 5) =$$

$$P(X \geq 7) =$$

$$P(X > 7) =$$

$$P(10 \leq X < 20) =$$

$$P(10 \leq X \leq 20) =$$

$$P(X = 100) =$$

$$P(20 < X < 30) =$$

$$\text{"at least 30"} =$$

$$\text{"greater than 30"} =$$



Dealing with Probability Ranges

Q

A spinner is designed so that probability it lands on red is 0.3. Jane has 12 spins.

a) Find the probability that Jane obtains at least 5 reds.

Jane decides to use this spinner for a class competition. She wants the probability of winning a prize to be < 0.05 . Each member of the class will have 12 spins and the number of reds will be recorded.

b) Find how many reds are needed to win the prize.

Q

At Camford University, students have 20 exams at the end of the year. All students pass each individual exam with probability 0.45. Students are only allowed to continue into the next year if they pass some minimum of exams out of the 20.

What do the university administrators set this minimum number such that the probability of continuing to next year is at least 90%?